

6th Grade
Oct 23, 2020

Today we will:
-do some examples
-work on in-class
assignment

I will do binder
checks throughout
the week.

HOMEWORK:

Complete WS

THQ due MONDAY

ALEKS-60 minutes
due by 11:59pm next
Monday night 10/26





Math is fun!

**Listen to directions
for today's classwork.**

Please listen to directions for the cut-and-paste activity on ordering integers and absolute value.

The image depicts a classroom setting. On the left, a large whiteboard with a brown frame contains the text "Math is fun!" in pink cursive and "Listen to directions for today's classwork." in black bold font. To the right of the whiteboard, a framed picture shows a raccoon playing a xylophone. In the foreground, a cartoon girl with long blonde hair, wearing a blue jacket and black pants, sits on a green sofa with her arms raised. A colorful patterned rug is on the wooden floor.

Name: _____

October 2020

Score: _____

Absolute Value








Find the value:

1) $ 10 = \square$	2) $ -62 = \square$	3) $ 29 = \square$
4) $ -8 = \square$	5) $ 25 = \square$	6) $ -47 = \square$
7) $ 15 = \square$	8) $ -78 = \square$	9) $ 6 = \square$
10) $ -99 = \square$	11) $ 30 = \square$	12) $ -68 = \square$
13) $ 77 = \square$	14) $ -55 = \square$	15) $ 36 = \square$
16) $ -43 = \square$	17) $ 79 = \square$	18) $ -12 = \square$
19) $ 82 = \square$	20) $ -17 = \square$	21) $ 94 = \square$
22) $ -73 = \square$	23) $ 51 = \square$	24) $ -27 = \square$

ALIEN INTEGER ORDERING

CUT OUT EACH SET AND PASTE IN ORDER IN THE BLANK SPACES ON THE PAGE PROVIDED.





SET 1

 0	 5	 -3	 7	 -5	 11	 -13
---	---	--	---	--	--	---

SET 2

 -2	 6	 4	 -4	 12	 -8	 2
---	--	--	---	---	---	--

SET 3

 4	 -11	 1	 -6	 10	 5	 -3
--	--	--	---	---	--	---

